



basic education

Department:
Basic Education
REPUBLIC OF SOUTH AFRICA

AMANQAKU

IIMVAVANYO ZONYAKA NONYAKA KUZWELONKE WAMA- 2012 IBANGA 2 IMATHEMATIKA – ISIXHOSA UVIWO

AMANQAKU: 30

IXESHA : 1 iyure

IPHONDO _____

UMMANDLA _____

ISITHILI _____

IGAMA LESIKOLO _____

INOMBOLO YE-EMIS KUZWELONKE
(9 iidijithi)

--	--	--	--	--	--	--	--	--

IBANGA (umz. 2A) _____

IFANI _____

IGAMA _____

ISINI (✓)

INKWENKWE

INTOMBAZANA

UMHLA WOKUZALWA

C	C	Y	Y	M	M	D	D
---	---	---	---	---	---	---	---



* 2 M A X H *

Olu viwo lunamaphepha a-10, ngaphandle kolu qweqwe

Imiyalelo kutitshala.

Fundela abafundi umbuzo ngamnye kube kabini
ubuncinane, ngokucacileyo, ungangxamanga ngeli xa be jonga
kwiincwadana zabo. Emva koko nika abafundi ithuba lokuzibhalela
iimpendulo kwizithuba ezinikiweyo. Bakuba begqibile ukubhala
iimpendulo zombuzo ngamnye qhuba ubafundele, ubanika ithuba
lokubhala iimpendulo de baye kufika kumbuzo wokugqibela.
Akuvumelekanga ukuba iikhatyhuleyitha zisetyenziswe. Ixesha
lokubhala olu viwo yimizuzu engama-60.

1. Fakela inani elishiyiweyo kule patheni.

95		105	110
----	--	-----	-----

2. Gqibezela itheyibhile engezantsi.

Iimilo	Inani leemilo zizonke	Inani ngamagama

3. Bhala impendulo kwibhokisi.

a. $38 + 13 =$

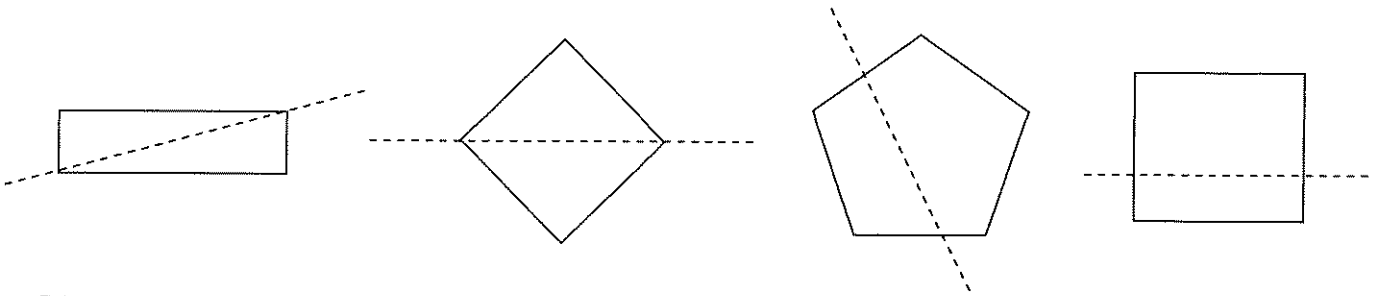
b. $80 - 30 =$

c. $8 \times 4 =$

4. Gqibezela esi sazobe si jingayo.

$$\begin{array}{lcl} 33 & \longrightarrow & \boxed{-10} \longrightarrow a. \underline{\hspace{2cm}} \\ 74 & \longrightarrow & \longrightarrow b. \underline{\hspace{2cm}} \end{array}$$

5. Phawula (✓) imilo eyenziwe umgca wolingano-macala echanekileyo.






6. Phendula imibuzo elandelayo.

a. Phinda inani kabini $45 = \underline{\hspace{2cm}}$

b. Yenza ihafu yenani $74 = \underline{\hspace{2cm}}$

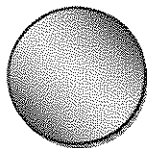
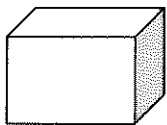
7. Bhala amagama "semva" okanye "phambi" ukugqibezela isivakalisi.



a. Umthi u _____ kwemoto.

b. Ibhola i _____ kwemoto.

8. Faka u-"X" kwinto enokuqengqeleka.



9. Sebenzisa ikhalenda ukuphendula imibuzo.

Okthobha						
Cawa	Mvulo	Lwesi bini	Lwesi thathu	Lwesine	Lwesi hlanu	Mgqi belo
				1	2	3
4	5	6	7	8	9	10
11	12	13	14	15	16	17
18	19	20	21	22	23	24
25	26	27	28	29	30	31

a. Unini umhla okwiintsuku ezi-2 emva komhla wesi-7 ku-Okthobha?

b. Umhla wokuzalwa kaBusi wawukwiintsuku ezi-3 phambi komhla wama-30 kuOkthobha.

Wawungoluphi usuku umhla wakhe wokuzalwa?

10. Faka u-"X" kweyona toti inokuba namanzi amaninzi.



11. Faka u-"X" kwimilo ekukhuhlwe ikota enye.

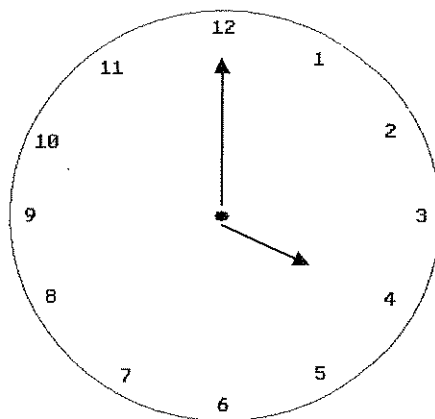


12. Sebenzisa iinkozo zemali uze uphendule umbuzo.



Iinkozo zemali ezingentla zenza _____

13. Ngubani ixesha elibonakaliswe kwiwotshi?



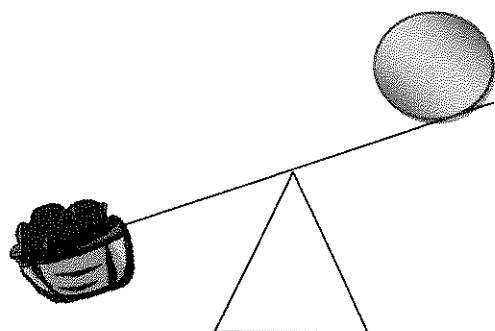
Ixesha yintsimbi ye _____ entloko.

14. Bhala ixabiso lenani elikrwelelwe umgca ngaphantsi kumanani owanikiweyo.

63


36

15. Yenza isangqa kwinto elula.



16. Jonga umfanekiso wama-apile.

Phendula umbuzo olandelayo.



Yahlula ama-apile angama-36 kubantu aba-5 ukuze bonke bafumane ama-apile alinganayo.

Umntu ngamnye ufumana ama-apile _____ kuze kushiyeke _____.

17. Jonga umfanekiso uze uphendule umbuzo.







Kufuneka iikomityi ezimbini zomgubo wengqolowa ukwenza ikeyiki. Zingaphi iikomityi ezifunekayo ukwenza ikeyiki ezi-5 ezifanayo? Ziikomityi ezi-_____ zomgubo wengqolowa.

18. UMakaziwe umka kowabo ngecala emva kwentsimbi yesi-7, ufika esikolweni ngentsimbi yesi-8 entloko.

Uthatha ixesha elingakanani ukuya esikolweni?

_____ .

19. USenzo uthenge iziqhamo emarikeneni. Uthenge:

ama-apile ama-3	iibhanana ezi-10	iiorenji ezi-7	amaqunube ama-4
			

Bonakalisa ngokuhlikihla kwigrafu ukuba uSenzo uthenge iziqhamo ezingaphi.

Inani leziqhamo	10				
	9				
	8				
	7				
	6				
	5				
	4				
	3				
	2				
	1				
		Ama- apile	iibhanana	iiorenji	amaqunube
Iintlobo zeziqhamo					

AMANQAKU : 30